



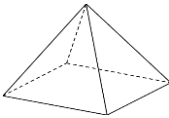
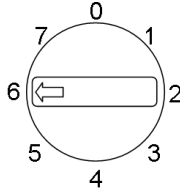


Name: _____

Date: _____

Class/Group: _____

A: Place Value, Add and Subtract		B: Multiply, Divide and Fractions		C: Measure and Geometry	
1. What is the missing number? 12 22 32 42 52 <input type="text"/>	2:1	11. $9 \times 5 =$	2:11	21. Which of these has the greatest capacity ? a. a bath b. a bucket c. a cup	2:18
2. Circle the 3s that have a value of 3 . 13 38 43 31	2:2	12. Which are the odd numbers? 2 7 16 23	2:11		
3. What number is labelled? 	2:3	13. What symbol is missing? 3×5 <input type="text"/> 15	2:12	22. How many minutes are there in 1 hour ? a. 12 b. 24 c. 60	2:21
4. Put these in order, smallest first. 34 4 43 3	2:4	14. What symbol is missing? 14 <input type="text"/> 7 = 2	2:12		
5. Write this number in words. 71	2:5	15. Is this true? Write 'yes' or 'no'. $15 \div 3 = 3 \div 15$	2:13	23. Which of these shapes has 4 sides ? a. triangle b. circle c. square	2:23
6. A garden has 15 trees. 9 more are planted. How many trees now?	2:6	16. 4 flowers each have 7 petals. How many petals are there in total?	2:14		
7. Use $11 + 9 = 20$ to answer: $55 +$ <input type="text"/> $= 100$	2:7	17. I have 18 eggs. If they come in boxes of 6, how many boxes do I have?	2:14	24. Complete the sentence: A square based pyramid has 8 a. vertices b. edges c. faces	2:24
8. $9 + 7 + 8 =$	2:8	18. What fraction of the strawberries is circled? 	2:15		
9. Tick (✓) if true: $28 - 7 = 7 - 28$ <input type="checkbox"/> $38 + 6 = 6 + 38$ <input type="checkbox"/>	2:9	19. Write the fraction two quarters in numerals.	2:15	25. This dial is pointing at 6. What number will it point to after being turned clockwise through 3 right angles ? 	2:28
10. Use $62 - 17 = 45$ to help find: $17 + 45 =$ <input type="text"/>	2:10	20. What is $\frac{1}{4}$ of 20 ?	2:16		
Total (A)		Total (B)		Total (C)	
Test Total (A+B+C)		R (0-9)	Y (10-19)	G (20-25)	